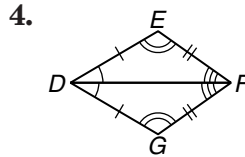
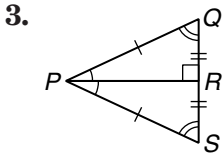
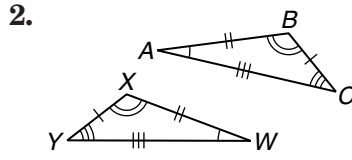
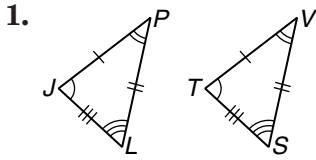


4-3 Skills Practice

Congruent Triangles

Identify the congruent triangles in each figure.



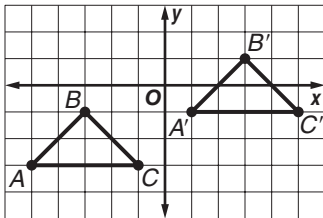
Name the congruent angles and sides for each pair of congruent triangles.

5. $\triangle ABC \cong \triangle FGH$

6. $\triangle PQR \cong \triangle STU$

Verify that each of the following transformations preserves congruence, and name the congruence transformation.

7. $\triangle ABC \cong \triangle A'B'C'$



8. $\triangle DEF \cong \triangle D'E'F'$

